



<p>Thursday</p>	<p>https://whiterosemaths.com/homelearning/year-3/ Week 5, 18th May, Lesson 4</p> <p>corbettmathsprimary.com 5-a-day 21th May Bronze</p>	<p>Your task is to write instructions to make your favourite sandwich.</p> <p>Fill in sheet 3</p>	<p>Bug Club Work through the book allocated to you, answering the questions at the end</p>	
<p>Friday</p>	<p>https://whiterosemaths.com/homelearning/year-3/ Week 5, 18th May, Lesson 5 - challenge</p> <p>corbettmathsprimary.com 5-a-day 22th May Bronze</p>	<p>Your task is to write instructions to make your favourite sandwich. Edit and rewrite your work using your best handwriting.</p> <p>SC:</p> <ul style="list-style-type: none">- Use imperative verbs (Cut the tomatoes, Spread the butter...- Use chronological order- Use numbers- Use time connectives	<p>Classroom Secrets Download the Home learning pack (week 2)</p> <p>https://classroomsecrets.co.uk/free-home-learning-packs/</p>	

Mathematics

Already covered this content? Year 3 Week 5 w/c 18th May

We're aware that some of you will have already covered this content earlier in the lockdown period. If this is the case, here are your alternative lessons for Summer Week 5

Topic	Video	Premium Subscriber? Get the worksheet!
Add and subtract 2- and 3-digit numbers	https://vimeo.com/417332039	Autumn Block 2 Add and subtract 2-digit and 3-digit numbers - not crossing 10 or 100
Add 2- and 3-digit numbers	https://vimeo.com/417332285	Autumn Block 2 Add 2-digit and 3-digit numbers - crossing 10 or 100
Subtract 2-digits from 3-digits	https://vimeo.com/417332443	Autumn Block 2 Subtract a 2-digit number from a 3-digit number - crossing 10 or 100
Add 3-digit numbers	https://vimeo.com/417332649	Autumn Block 2 Add two 3-digit numbers - not crossing 10 or 100

Monday

Name: _____

Primary 5-a-day

Bronze

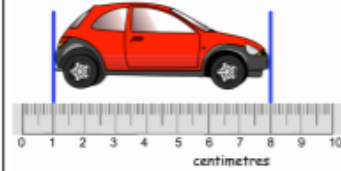


18th May

$$36 + 57$$

$$\begin{array}{r} 15 \\ \times 5 \\ \hline \end{array}$$

Here is a toy car



How long is the toy car?

Circle the number closest to 100

60 130 75 121 900

Carlos says

"When you halve a number that ends in 8, the answer always ends in 4."

Is Carlos correct?

Tuesday

Name: _____

Primary 5-a-day

Bronze



19th May

$$9 + 4 = 30 - \square$$

$$\begin{array}{r} 60 \\ - 28 \\ \hline \end{array}$$

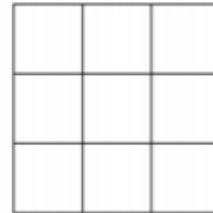
Here are six number cards.

10 30 40 40 50 70

Use **all** the number cards to complete the two sums

$$\square + \square = \square$$
$$\square + \square = \square$$

Shade in $\frac{1}{3}$ of this shape



Draw a right angle

Wednesday

Name: _____

Primary 5-a-day

Bronze



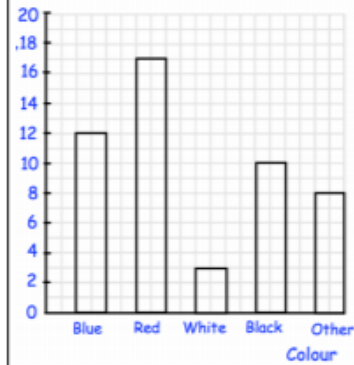
20th May

$$£17 + £15$$

$$4 \times 4$$

Here are the colours of cars in a car park

Colours of cars in the school car park

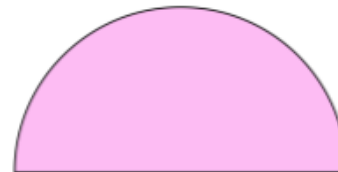


How many **white** cars are there?

How many more **blue** cars than **black** cars are there?

Here is a semi-circle

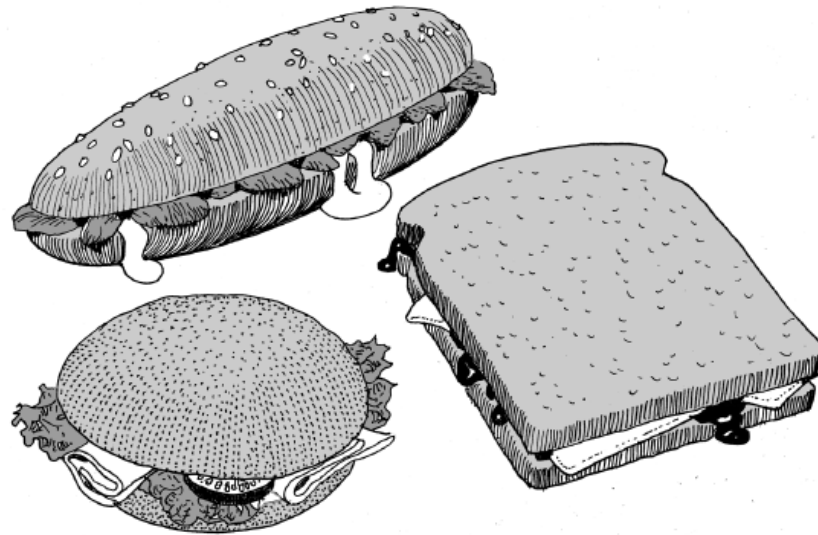
Measure the length of the straight edge.



English Writing

How to Make My Favourite Sandwich

Think about different sandwiches.

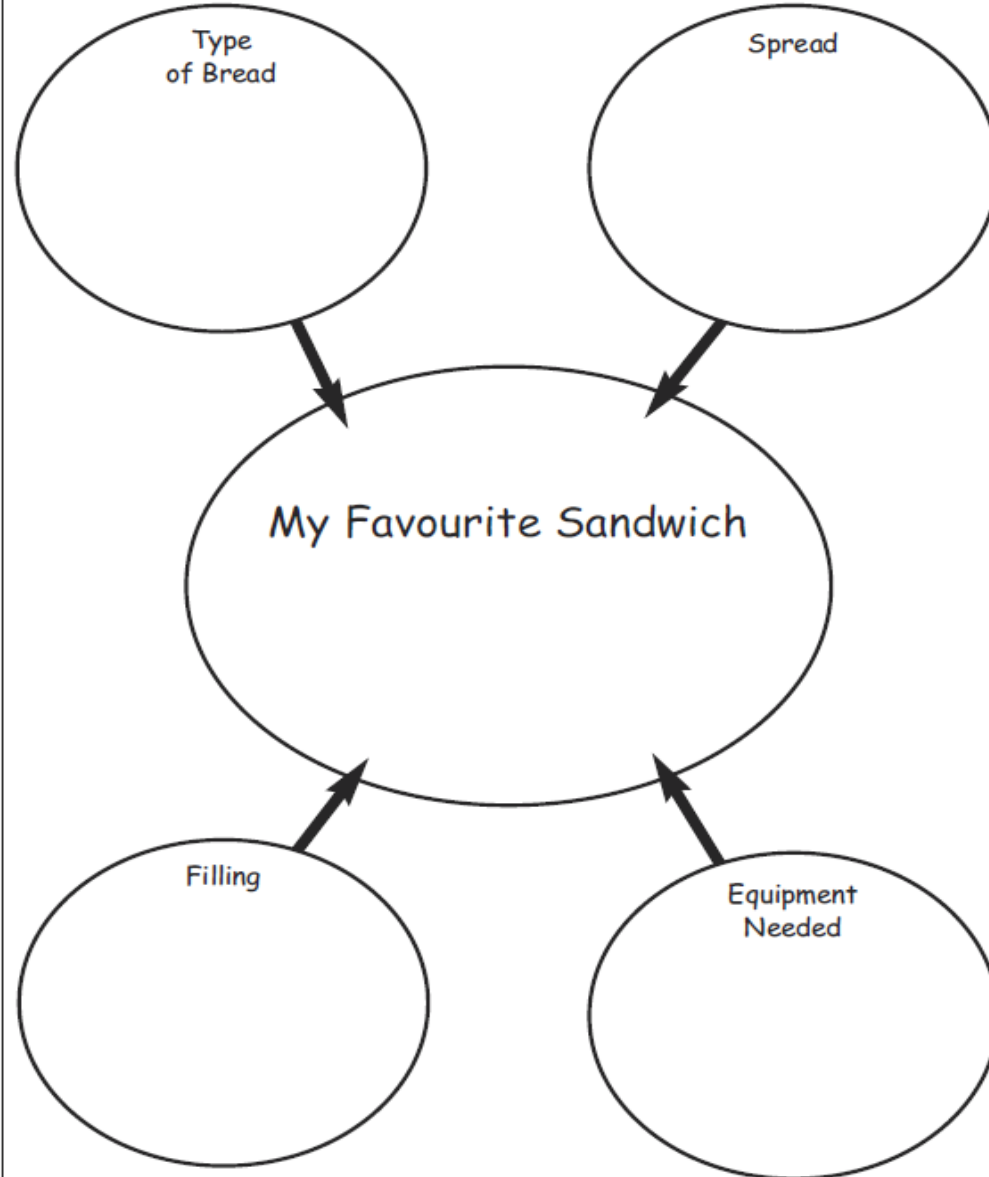


Task

Your task is to write instructions to make your favourite sandwich.

Name _____ Date _____

How to Make My Favourite Sandwich



Art

Romans



Choose one of the tasks and complete it. The best homework will be displayed on our school website.

(You can do more than 1 task)

Good Luck!

Create a comic strip about the day in the life of a Roman.

Design a new shield for a Roman legionary.

Draw and label pictures of artefacts from the Roman period.